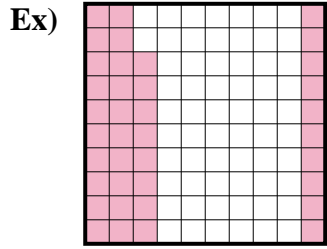
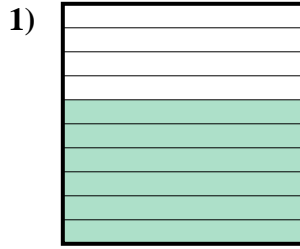




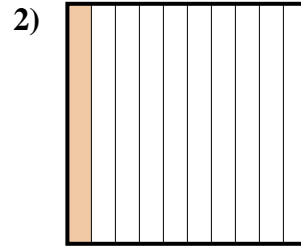
Determine the value written as a fraction , decimal & a percent.



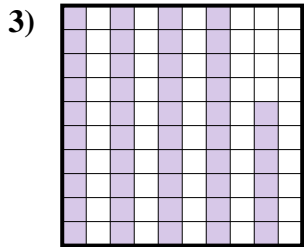
Fraction  $\frac{38}{100}$   
 Decimal 0.38  
 Percent 38%




Fraction \_\_\_\_\_  
 Decimal \_\_\_\_\_  
 Percent \_\_\_\_\_



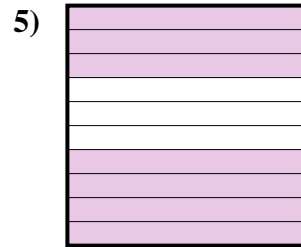
Fraction \_\_\_\_\_  
 Decimal \_\_\_\_\_  
 Percent \_\_\_\_\_



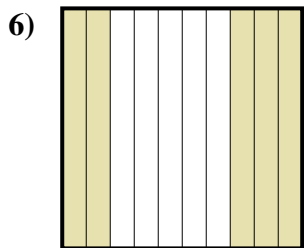
Fraction \_\_\_\_\_  
 Decimal \_\_\_\_\_  
 Percent \_\_\_\_\_



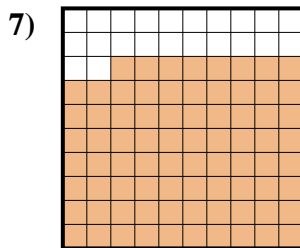
Fraction \_\_\_\_\_  
 Decimal \_\_\_\_\_  
 Percent \_\_\_\_\_



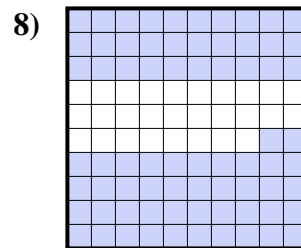
Fraction \_\_\_\_\_  
 Decimal \_\_\_\_\_  
 Percent \_\_\_\_\_



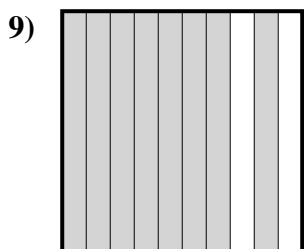
Fraction \_\_\_\_\_  
 Decimal \_\_\_\_\_  
 Percent \_\_\_\_\_



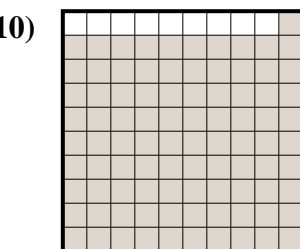
Fraction \_\_\_\_\_  
 Decimal \_\_\_\_\_  
 Percent \_\_\_\_\_




Fraction \_\_\_\_\_  
 Decimal \_\_\_\_\_  
 Percent \_\_\_\_\_



Fraction \_\_\_\_\_  
 Decimal \_\_\_\_\_  
 Percent \_\_\_\_\_



Fraction \_\_\_\_\_  
 Decimal \_\_\_\_\_  
 Percent \_\_\_\_\_



Fraction \_\_\_\_\_  
 Decimal \_\_\_\_\_  
 Percent \_\_\_\_\_

Answers

Ex.  $\frac{38}{100}$  0.38 38%

1. \_\_\_\_\_

2. \_\_\_\_\_

3. \_\_\_\_\_

4. \_\_\_\_\_

5. \_\_\_\_\_

6. \_\_\_\_\_

7. \_\_\_\_\_

8. \_\_\_\_\_

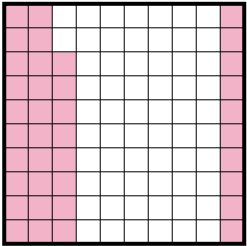
9. \_\_\_\_\_


10. \_\_\_\_\_

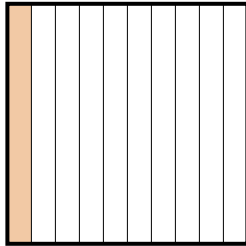
11. \_\_\_\_\_

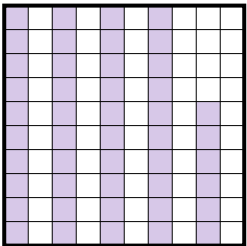



Determine the value written as a fraction , decimal & a percent.


Ex)   
 Fraction  $\frac{38}{100}$   
 Decimal  $0.38$   
 Percent  $38\%$

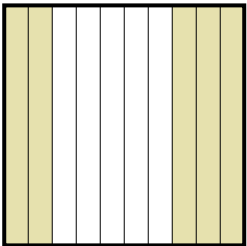
1)   
 Fraction  $\frac{6}{10}$   
 Decimal  $0.6$   
 Percent  $60\%$

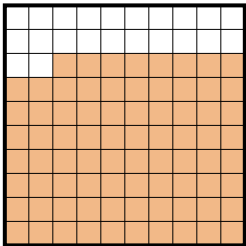
2)   
 Fraction  $\frac{1}{10}$   
 Decimal  $0.1$   
 Percent  $10\%$

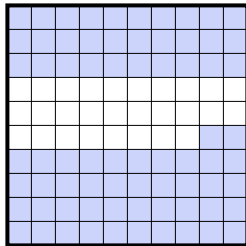
3)   
 Fraction  $\frac{46}{100}$   
 Decimal  $0.46$   
 Percent  $46\%$

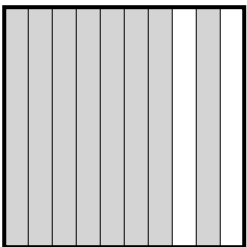
4)   
 Fraction  $\frac{4}{10}$   
 Decimal  $0.4$   
 Percent  $40\%$

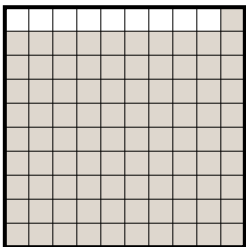
5)   
 Fraction  $\frac{7}{10}$   
 Decimal  $0.7$   
 Percent  $70\%$


6)   
 Fraction  $\frac{5}{10}$   
 Decimal  $0.5$   
 Percent  $50\%$

7)   
 Fraction  $\frac{78}{100}$   
 Decimal  $0.78$   
 Percent  $78\%$

8)   
 Fraction  $\frac{72}{100}$   
 Decimal  $0.72$   
 Percent  $72\%$

9)   
 Fraction  $\frac{8}{10}$   
 Decimal  $0.8$   
 Percent  $80\%$

10)   
 Fraction  $\frac{91}{100}$   
 Decimal  $0.91$   
 Percent  $91\%$

11)   
 Fraction  $\frac{3}{10}$   
 Decimal  $0.3$   
 Percent  $30\%$

**Answers**

Ex.  $\frac{38}{100}$   $0.38$   $38\%$   
 1.  $\frac{6}{10}$   $0.6$   $60\%$   
 2.  $\frac{1}{10}$   $0.1$   $10\%$   
 3.  $\frac{46}{100}$   $0.46$   $46\%$   
 4.  $\frac{4}{10}$   $0.4$   $40\%$   
 5.  $\frac{7}{10}$   $0.7$   $70\%$   
 6.  $\frac{5}{10}$   $0.5$   $50\%$   
 7.  $\frac{78}{100}$   $0.78$   $78\%$   
 8.  $\frac{72}{100}$   $0.72$   $72\%$   
 9.  $\frac{8}{10}$   $0.8$   $80\%$   
 10.  $\frac{91}{100}$   $0.91$   $91\%$   
 11.  $\frac{3}{10}$   $0.3$   $30\%$